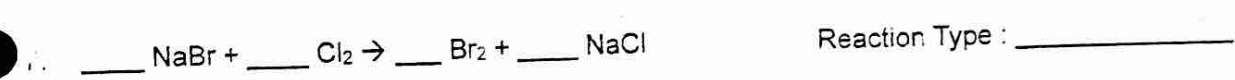
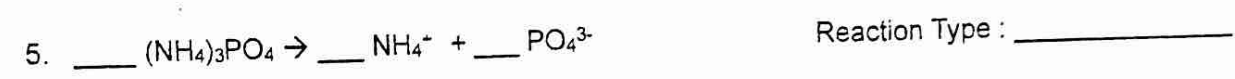
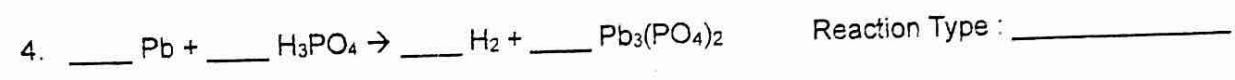
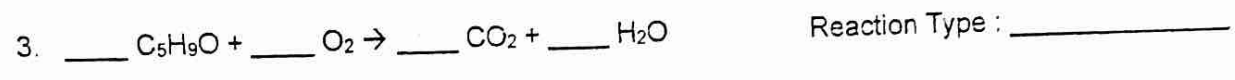
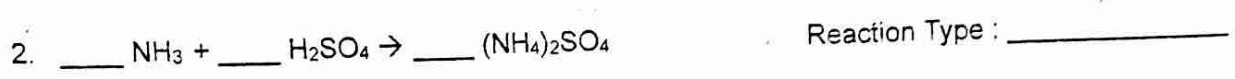
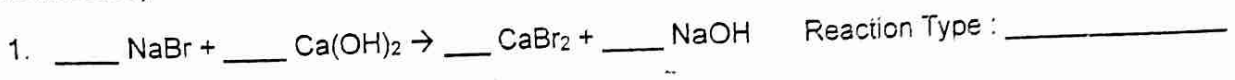


# Practice Sheet 21: Types of Reactions

DO NOT

DO

Balance the reactions 1 to 8 and indicate which type of chemical reaction is being represented (synthesis, decomposition, metallic or halogen single-replacement, double-replacement, dissociation or combustion)



*we will come back to balancing.*

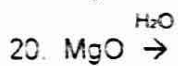
Indicate the type of reaction being represented:



Continue to determine the type of reaction and DO NOT attempt to complete the equation!



Reaction Type : \_\_\_\_\_



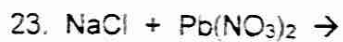
Reaction Type : \_\_\_\_\_



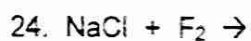
Reaction Type : \_\_\_\_\_



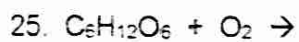
Reaction Type : \_\_\_\_\_



Reaction Type : \_\_\_\_\_



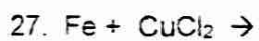
Reaction Type : \_\_\_\_\_



Reaction Type : \_\_\_\_\_



Reaction Type : \_\_\_\_\_



Reaction Type : \_\_\_\_\_



Reaction Type : \_\_\_\_\_