

Name: _____

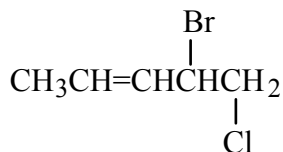
Period: ____

Practice Sheet #60

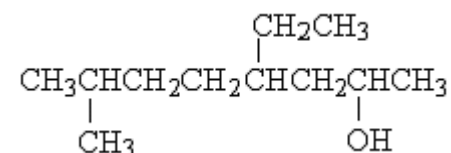
Organic Compounds

(1) Name the following organic compounds.

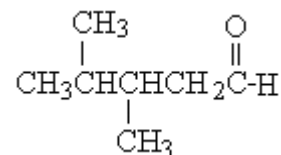
(a)



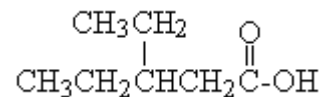
(b)



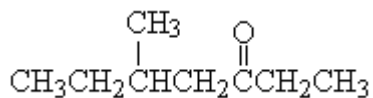
(c)



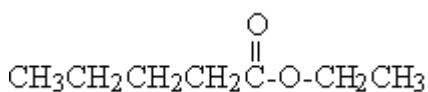
(d)



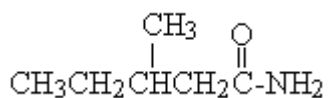
(e)



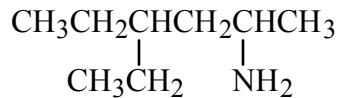
(f)



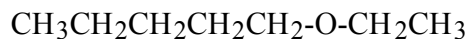
(g)



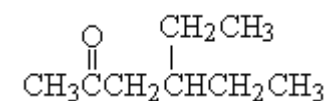
(h)



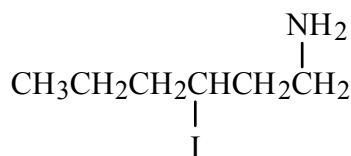
(i)



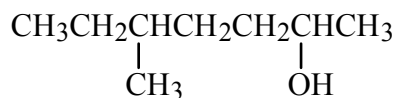
(j)



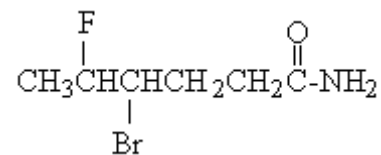
(k)



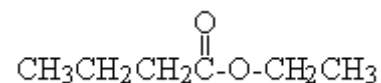
(l)



(m)



(n)



(2) Draw the following organic compounds.

(a) 2-Pentanol

(h) 3,5-Dibromohexanal

(b) Diethyl ether

(i) 5-Decanone

(c) 4-Methyl-2-pentanone

(j) 5-Bromo-2-hexanol

(d) 2-Methyl-butanamide

(k) Hexyl ethanoate

(e) 3-Ethylpentanal

(l) Butanamide

(f) Propyl ethanoate

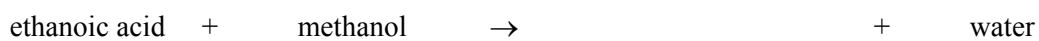
(m) 2-Amino-4,4-Dichloropentane

(g) 3-Aminopentane

(n) Pentyl propyl ether

(3) Complete the following condensation reactions.

(a)



(b)

