

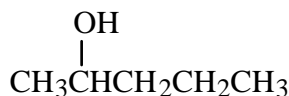
Name: _____

Period: ____

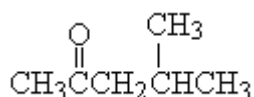
Organic Compounds

(1) Classify each compound and match with the correct name below.

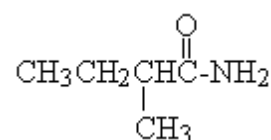
#1



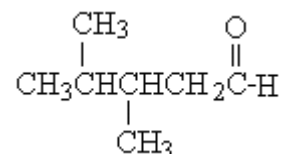
#2



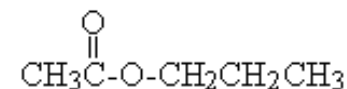
#3



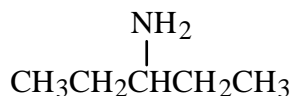
#4



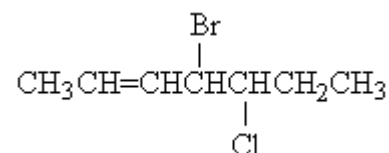
#5



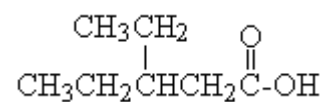
#6



#7



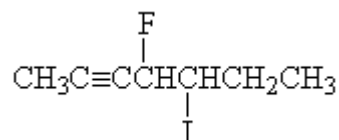
#8



#9



#10



- | | |
|-------------------------------|--------------------------------|
| (a) 3-aminopentane | (f) propyl ethanoate |
| (b) pentyl propyl ether | (g) 3,4-dimethylpentanal |
| (c) 3-ethyl pentanoic acid | (h) 2-methyl butanamide |
| (d) 2-pentanol | (i) 4-bromo-5-chloro-2-heptene |
| (e) 4-fluoro-5-iodo-2-heptyne | (j) 4-methyl-2-pentanone |

(2) Complete the following condensation reactions.

